

Name- \_\_\_\_\_

STD. – V

Roll No. \_\_\_\_\_

**ADVERBS:-** Adverbs are the words that add to the meaning of a verb. They tell us more about a verb. They also tell us the manner someone does something e.g. Ravi runs slowly. Here, the adverb 'slowly' tells us how Ravi runs.

**Q.1: Underline the Adverbs:-**

1. The tank is almost full.
2. I always pray to God in the morning.
3. I looked for my pet there.
4. He scolded the naughty boys harshly.
5. My father will be forty tomorrow.

**Q.2: Pick out the Adverb in the following sentences and write the type of Adverb:-**

1. We shall play the match today. \_\_\_\_\_
2. The sun is shining brightly. \_\_\_\_\_
3. The water was everywhere after the flood. \_\_\_\_\_
4. The children were talking continuously. \_\_\_\_\_
5. The watchman closed the gates early. \_\_\_\_\_

### CONJUNCTIONS

**Q.3: Fill in the Blanks with correct conjunctions:-**

1. Don't go near the dog \_\_\_\_\_ it may bite.
2. Are the clothes wet \_\_\_\_\_ dry?
3. This sofa is both comfortable \_\_\_\_\_ cheap.
4. I was punished \_\_\_\_\_ I was late.
5. He did not practice enough \_\_\_\_\_ he was not selected in the team.

6. Mr. John is old \_\_\_\_\_ he is physically fit.

7. \_\_\_\_\_ we make a noise, the teacher will punish us.

Q.4: Underline the Conjunctions:-

1. The bag is heavy so the child can't carry it.
2. Sheena would like to wear a skirt or jeans.
3. Raghav will be selected for the team if he plays well.
4. She was late for breakfast because she overslept.
5. He had his breakfast while he watched television.

Q5: Fill in the blanks with Past Perfect Continuous tense form of the verbs in the bracket.

1. The baby \_\_\_\_\_ (sleep) for two hours.
2. The children \_\_\_\_\_ (study) since morning.
3. The phone \_\_\_\_\_ (ring) for a long time.

Q6: Fill in the blanks with correct tense given in the bracket.

1. You \_\_\_\_\_ -(write) a story since morning. (Present Perfect Continuous)
2. She \_\_\_\_\_ (solve) sums since morning. (Present Perfect Continuous)
3. We \_\_\_\_\_ (live) here for ten years. (Future Perfect Continuous)
4. She \_\_\_\_\_ (teach) English for ten years. (Present Perfect Continuous)
5. They \_\_\_\_\_ (conduct) the auditions for annual play soon. (Future Perfect Continuous)

Q7: Change the tense of the given sentences.

1. He worked hard for examination for four months. (Past Perfect Continuous Tense)
2. Jimmy plays tennis since he was ten. (Present Perfect Continuous Tense)
3. My brother has been acting for four months. (Future Perfect Continuous Tense)
4. Mr. Obama visit India in March. (Future Perfect Continuous Tense)

प्र० 1 निम्नलिखित वाक्यों के लिंग बदलें ।

1. पुजारी पूजा कर रहा है ।
2. बकरा घास चर रहा है ।
3. जेठ जी खाना खा रहे हैं ।
4. मैंने हिरन देखा ।

प्र० 2 निम्नलिखित वाक्यों के वचन बदलें ।

1. पंखा चल रहा है ।
2. मैंने बाजार से साड़ी खरीदी ।
3. मैंने शहीदों पर कविता लिखी ।
4. उसे किताब दे दो ।

प्र० 3 विलीन शब्द

1. उत्थान -
2. स्वच्छ -
3. मान -
4. उदय -

प्र० 4 पर्यायवाची शब्द

1. समुद्र - \_\_\_\_\_ , \_\_\_\_\_ , \_\_\_\_\_
2. आसान - \_\_\_\_\_ , \_\_\_\_\_ , \_\_\_\_\_
3. हास्ता - \_\_\_\_\_ , \_\_\_\_\_ , \_\_\_\_\_
4. प्रयत्न - \_\_\_\_\_ , \_\_\_\_\_ , \_\_\_\_\_

प्र० 5 - अशुद्धि संशोधन

1. प्रमात्मा -
2. समाजिक -
3. ईच्छा -
4. हिंदु -

प्र० 6 - निम्नलिखित मुहावरों के अर्थ बताकर वाक्य बनाएं ।

1. अक्ल पर पत्थर पड़ना
2. अपना सा मुँह लेकर रह जाना।
3. आसमान सिर पर उठाना

प्र०७- क्रिया शब्दों को रेखांकित करें।

1. राम पत्र लिख रहा है।
2. मोहन खाना खा रहा है।
3. राधा चित्र बना रही है।
4. किसान हल चला रहा है।

प्र०८ प्रस्तुत कहानी को सही क्रम में लिखिए।

1. उसने हाथी की सूँड में सूई चुभा दी।
2. हाथी नदी से पानी पीकर रोज दरजी की दुकान पर जाता।
3. एक हाथी और दरजी में मित्रता थी।
4. दरजी उसे रोज एक केला देता था।
5. एक दिन दुकान पर दरजी का बेटा बैठा था।
6. हाथी ने अपनी सूँड में गंदा पानी भर कर दुकान में डाल दिया।

प्र०९- निबंध → मेरा विद्यालय  
गणतंत्र दिवस

प्र०१० पत्र → कविता वाचन प्रतियोगिता में प्रथम स्थान  
प्राप्त करने पर मित्र/सहेली को बधाई पत्र।  
OR  
बहन की शादी पर छुट्टी माँगते हुए  
प्रधानाचार्य जी को पत्र

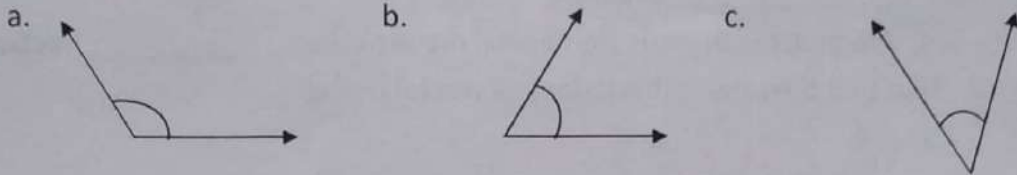
- Fill in the blanks:
  - A fraction whose value is less than 1 is called \_\_\_\_\_ fraction.
  - In fraction  $\frac{8}{11}$ , 8 is the \_\_\_\_\_ and 11 is the \_\_\_\_\_.
  - If the numerator is greater than the denominator then the fraction is an \_\_\_\_\_ fraction.
  - Fractions with same denominators are called \_\_\_\_\_ fractions.
- Find first 5 equivalent fractions of the following:
  - $\frac{6}{11}$
  - $\frac{3}{7}$
  - $\frac{5}{9}$
- Find the following:
  - $\frac{2}{3}$  of an hour
  - $\frac{6}{8}$  of ₹ 100
  - $\frac{1}{4}$  of 5000 km
- The cost of a notebook is ₹  $14\frac{1}{2}$ . Find the cost of one dozen notebooks.
- A box of 7 candies is for ₹ 120. What is the cost of each candy?
- Find the product and write the answer in the lowest term:
  - $24 \times 3\frac{1}{4}$
  - $5\frac{1}{8} \times 4$
- Kritika read  $\frac{3}{5}$  of the book in a day. If the total number of pages is 125, how many pages did she read?
- Divide the following:
  - $100 \div 33\frac{1}{3}$
  - $\frac{1}{5} \div 3$
  - $2\frac{2}{3} \div 1\frac{1}{6}$
  - $10\frac{1}{3} \div 4\frac{1}{2}$
- The perimeter of a square is  $18\frac{1}{2}$  metre. What would be the measure of 1 side?
- Simplify and write in lowest term:
  - $\frac{3}{11} + \frac{2}{5} + \frac{1}{55}$
  - $3\frac{4}{5} + 1\frac{7}{15}$
- Mr. Varun had  $15\frac{2}{5}$  litres of petrol in his car. He went for a drive. By the time he reached home, he had only  $2\frac{1}{3}$  litres of petrol left. How much petrol was used?
- Nina bought  $4\frac{5}{6}$  metres of cloth while Rajni bought  $2\frac{1}{4}$  metres of cloth.
  - Find the total length of the cloth bought altogether.
  - Who bought more cloth and by how much?
- Draw and name the following:
  - a horizontal line
  - a vertical line
  - a slanting line

14. Identify the angles as acute, right, obtuse, straight, reflex or complete angle:

- a.  $125^{\circ}$       b.  $90^{\circ}$       c.  $38^{\circ}$       d.  $57^{\circ}$       e.  $360^{\circ}$   
f.  $180^{\circ}$       g.  $240^{\circ}$       h.  $105^{\circ}$

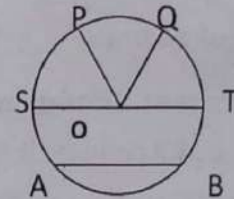
15. With the help of compass, draw a circle of radius 4.5 cm. Find its diameter also.

16. Measure the following angles using protractor:



17. In the given figure name:

- a. all the radii  
b. all the chords  
c. all the diameters



18. Draw and name the following angles using protractor:

- a.  $140^{\circ}$       b.  $120^{\circ}$       c.  $70^{\circ}$   
d.  $90^{\circ}$       e.  $45^{\circ}$       f.  $60^{\circ}$

19. Draw a circle with centre M and radius 2.8 cm and mark the following points:

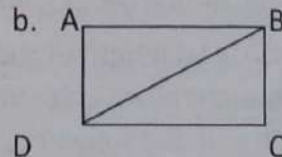
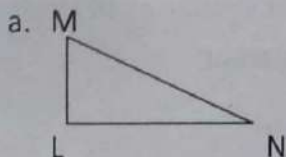
- a. R in the interior of the circle.  
b. S on the circle.  
c. P in the exterior of the circle.

20. Define and draw the following:

- a. A line      b. A ray      c. A line segment

21. Construct a line segment AB of length 3.5 cm and CD of length 1.8 cm. Construct a line segment MN whose length is the sum of AB and CD.

22. Name all the line segments and all the angles in each of the following figures:



ਪ੍ਰਸ਼ਨ 1. ਹੇਠ ਲਿਖਿਆ ਅਣੀਡੋਠਾ ਪੈਰਾ ਪੜ੍ਹ ਕੇ ਪ੍ਰਸ਼ਨਾਂ ਦੇ ਉੱਤਰ ਦਿਓ।  
 ਇੱਕ ਖਿੰਡੇ ਵਿੱਚ ਇੱਕ ਆਜ਼ਾਦੀ ਗੀਤ ਸੀ। ਉਹ ਜੰਗਲ ਵਿੱਚ  
 ਤੇਠਾਂ ਬੱਕਰੀਆਂ ਚਰਾਉਣ ਜਾਇਆ ਕਰਦਾ ਸੀ। ਆਜ਼ਾਦੀ ਬਹੁਤ ਹੀ  
 ਜ਼ਰੂਰੀ ਸੀ। ਇੱਕ ਦਿਨ ਉਹ ਤੇਠਾਂ ਬੱਕਰੀਆਂ ਚਰਾ ਰਿਹਾ ਸੀ ਕਿ  
 ਉਸਨੂੰ ਇੱਕ ਜ਼ਰਾਹਤ ਸੁੱਝੀ। ਉਹ ਇੱਕ ਉੱਚੀ ਜਗ੍ਹਾ ਤੇ ਖੜ੍ਹੇ ਰਿਹਾ  
 ਅਤੇ ਉਸਨੇ ਉੱਚੀ-ਉੱਚੀ ਚੀਕਾ ਖਾਉਣਾ ਸ਼ੁਰੂ ਕਰ ਦਿੱਤਾ।

- (1) ਇੱਕ ਖਿੰਡੇ ਵਿੱਚ ਕੌਣ ਗੀਤ ਸੀ?
- (2) ਉਹ ਜੰਗਲ ਵਿੱਚ ਕੀ ਕਰਨ ਜਾਇਆ ਕਰਦਾ ਸੀ?
- (3) ਇੱਕ ਦਿਨ ਆਜ਼ਾਦੀ ਨੂੰ ਕੀ ਸੁੱਝੀ?
- (4) ਆਜ਼ਾਦੀ ਨੇ ਕੀ ਕਰਨਾ ਸ਼ੁਰੂ ਕਰ ਦਿੱਤਾ?

ਪ੍ਰਸ਼ਨ 2. ਹੇਠ ਲਿਖੇ ਪ੍ਰਸ਼ਨਾਂ ਦੇ ਉੱਤਰ ਦਿਓ।

- (1) ਬੇਈਮਾਨੀ ਦੀ ਕਮਾਈ ਦੇ ਕੀ-ਕੀ ਨੁਕਸਾਨ ਹਨ?
- (2) ਸਾਨੂੰ ਜ਼ਿੰਦਗੀ ਵਿੱਚ ਕਿਸ ਤਰ੍ਹਾਂ ਦੇ ਇਨਸਾਨ ਬਣਨਾ ਚਾਹੀਦਾ ਹੈ?
- (3) ਬਿਮਾਰੀਆਂ ਤੋਂ ਦੂਰ ਰਹਿਣ ਲਈ ਸਾਨੂੰ ਕੀ-ਕੀ ਕਰਨਾ ਚਾਹੀਦਾ ਹੈ?
- (4) ਸਾਨੂੰ ਆਪਣੇ ਆਪਣੇ ਦੁਆਰੇ ਕੀ ਫੈਲਾਉਣਾ ਚਾਹੀਦਾ ਹੈ?

ਪ੍ਰਸ਼ਨ 3. ਖਾਲੀ ਥਾਵਾਂ ਭਰੋ:-

- (1) \_\_\_\_\_ ਇੱਕ ਦਵਾਈ ਦੀ ਤਰ੍ਹਾਂ ਕੰਮ ਕਰਦਾ ਹੈ।
- (2) ਬੇਈਮਾਨ ਵਿਅਕਤੀ ਕਦੇ \_\_\_\_\_ ਨਹੀਂ ਕਰ ਸਕਦਾ।
- (3) ਸਾਨੂੰ \_\_\_\_\_ ਨਹੀਂ ਚਾਹੁਣਾ ਚਾਹੀਦਾ।
- (4) ਸਾਨੂੰ ਆਪਣੇ ਚਿਹਰੇ \_\_\_\_\_ ਵਰਗੇ ਰੱਖਣੇ ਚਾਹੀਦੇ ਹਨ।

ਪ੍ਰਸ਼ਨ 4. ਹੇਠ ਲਿਖੇ ਵਾਕਾਂ ਦੇ ਲਿੰਗ ਬਦਲੋ:-

- (1) ਬੱਦਲ ਵਰ੍ਹ ਰਿਹਾ ਹੈ।
- (2) ਮਾਨੀ ਨੇ ਹਰ ਪੱਕੇਇਆ।
- (3) ਕੁੜੀ ਰੱਸੀ ਟੱਪ ਰਹੀ ਹੈ।
- (4) ਦਾਦਾ ਜੀ ਪੈਂਤੇ ਨਾਲ ਮੇਲੇ ਗਏ।

ਪ੍ਰਸ਼ਨ 5. ਹੇਠ ਲਿਖੇ ਵਾਕਾਂ ਦੇ ਫੁਲਨ ਬਦਲੋ:-

- (1) ਬੱਚੇ ਨੇ ਗੀਤ ਗਾਇਆ।
- (2) ਈਡਾ ਝੁੱਲ ਰਿਹਾ ਹੈ।
- (3) ਉਸ ਨੇ ਸੀਮਾ ਤੋੜ ਦਿੱਤਾ।
- (4) ਮੇਰੇ ਖੈਲ ਯਾ ਰਿਹਾ ਹੈ।
- (5) ਕੋਠੇ ਉੱਤੇ ਮੰਜਾ ਥਿਆ ਹੈ।

ਪ੍ਰਸ਼ਨ 6. ਹੇਠ ਲਿਖੇ ਸ਼ਬਦ ਸੁੱਧ ਕਰਕੇ ਲਿਖੋ।

- (1) ਕਗਨੀ (2) ਸੁਗਯ (3) ਮੇਗਾ (4) ਫੁਲ (5) ਕੁਖ (6) ਥਾਨੀ

ਪ੍ਰਸ਼ਨ 7. ਵਿਰੋਧੀ ਸ਼ਬਦ ਲਿਖੋ।

- (1) ਅਮੀਰ (2) ਭਲਾ (3) ਠੰਢਾ (4) ਤਾਹਾ (5) ਮਿੱਠਾ
- (6) ਜਿੱਤ (7) ਦਿਨ (8) ਠੀਕ

ਪ੍ਰਸ਼ਨ 8. ਹੇਠਾਂ ਲਿਖੀ ਵਰਗ ਖੋਲ੍ਹੀ ਵਿੱਚੋਂ ਵਿਸ਼ੇਸ਼ ਸ਼ਬਦ ਚੁਣੋ:-

ਕ	ਗੋ	ਯ	ਮੋ	ਟਾ
ਹ	ਗਾ	ਠ	ਨੀ	ਤ
ਇ	ਹ	ਘ	ਲਾ	ਉ
ਤੇ	ਘ	ਤ	ਚਾ	ਹ
ਜ	ਯ	ਲਾ	ਰ	ਫ



Assignment: Chapter- 11 (Light and Shadows)

**Q1. Fill in the blanks.**

1. The \_\_\_\_\_ in the main source of energy.
2. \_\_\_\_\_ objects have their own light.
3. Light travels in a \_\_\_\_\_ path.
4. Clear gas is an \_\_\_\_\_ object.
5. A solar eclipse occurs on a \_\_\_\_\_ day.

**Q2. Name of the following.**

1. Name two translucent objects.
2. Deep pits formed on surface of moon.
3. Name the first person to land on moon.
4. Name two luminous objects.
5. Name two artificial satellite.

\_\_\_\_\_

\_\_\_\_\_

\_\_\_\_\_

\_\_\_\_\_

\_\_\_\_\_

**Q3. Answer the following.**

1. Define tides.
2. Why does life not exist on the moon?
3. How do we see the object?
4. Define shadow.
5. What is partial solar eclipse?
6. Why does moon shine?
7. When does a total lunar eclipse occurs?
8. What is the role of remote sensing satellites?
9. Which was the first Indian satellite launched in 1975?
10. Differentiated between transparent and translucent objects.

**Q4. Multiple Choice Questions**

1. Tides are caused due to the gravitational pull of the  
(a) Moon (b) Sun (c) Earth (d) All of these
2. The colour of shadow is always  
(a) Same as the object (b) Black (c) Red (d) Green
3. Chandrayaan-1 was launched by India in 2008 to orbit  
(a) Moon (b) Sun (c) Planets (d) Meteorites
4. Solar eclipse occurs on  
(a) Full moon day (b) New moon day (c) Full moon night (d) None
5. A lunar eclipse occurs on  
(a) New moon day (b) Full moon day (c) Full moon night (d) All of these

**FUN TIME**

Fill in the crossword with the help of the clues given below.

- |  |  |
|--|--|
| 1. ↓ glassy igneous rock                   | 8. ↓ sedimentary rock from calcite             |
| 2. ↓ metamorphosed sandstone               | 9. → sedimentary rock with pebbles             |
| 3. ↓ molten rock above the earth's surface | 10. ↓ slow-cooled igneous rock                 |
| 4. → porous rock                           | 11. → banded metamorphic rock                  |
| 5. → sedimentary rock from mud and clay    | 12. ↓ molten rock under the earth's surface    |
| 6. → metamorphosed limestone               | 13. → compressed sand in Red Fort              |
| 7. → weathered rocks form this             | 14. → greenish-grey igneous rock with crystals |

1↓

2↓

3↓

4→

5→ S

6→

7→

8↓

9→ N

10↓

11→ G

12↓

13→

14→ A

1↓

2↓

3↓

4→

5→

6→ R

7→

8↓

9→

10↓

11→

12↓

13→

14→



**Q1. Out of the following description mention which relate to the Rajya Sabha and Which relate to Lok Sabha. Write correctly in blanks .**

1. Upper house \_\_\_\_\_
2. Lower house \_\_\_\_\_
3. House of the people \_\_\_\_\_
4. 250elected and nominated members \_\_\_\_\_
5. Speaker \_\_\_\_\_
6. Chairman \_\_\_\_\_
7. Term of 6 years \_\_\_\_\_
8. Term of 5 Years \_\_\_\_\_

**Q2. Fill in the blanks**

1. The law making body is known as \_\_\_\_\_
2. India consists of \_\_\_\_\_ states and \_\_\_\_\_ union territories .
3. The \_\_\_\_\_ contains everything .
4. \_\_\_\_\_ is he government of the people ,for the people and by the people .
- 5 . \_\_\_\_\_ is the head of the state .

**Q3. Matching**

- |                         |                 |
|-------------------------|-----------------|
| 1. President            | Judiciary       |
| 2. Legislative Assembly | Independence    |
| 3. Important organ      | Right           |
| 4. Powers               | Head of country |
| 5. Freedom              | Judiciary       |

**Q4. Answer the following questions.**

1. What does the Parliament consists of ?
- 2 . What is Government ?
3. Who has right to vote in India ?
4. Who become the chief minister of state ?

**I Fill in the blanks:**

1. About 90% of an \_\_\_\_\_ is always under water.
2. A \_\_\_\_\_ can live in a very cold climate.
3. Huskies are used to pull \_\_\_\_\_.
4. \_\_\_\_\_ is the world's largest island.
5. The Inuits use boats called \_\_\_\_\_ to hunt sea animals.

**II Write 'T' for true and 'F' for false statements:**

1. Nuuk is the capital of Greenland. \_\_\_\_\_
2. Greenland is also called Eskimo land. \_\_\_\_\_
3. Earlier Inuits used to hunt animals with bows and arrows. \_\_\_\_\_
4. A Kayak is a two person boat. \_\_\_\_\_

**III Give one sentence answer:**

1. What are parkas?
2. What are kayaks?
3. Where are the Polar Regions located?
4. Why is most of the Greenland covered with snow throughout the year?
5. Why do Inuits hunt animals?

**IV Match the following:**

- |              |                       |
|--------------|-----------------------|
| 1. Inuits    | (a) wolf-like dogs    |
| 2. Huskies   | (b) huge piece of ice |
| 3. Kayak     | (c) midnight sun      |
| 4. Iceberg   | (d) Eskimos           |
| 5. Greenland | (e) hunt animals      |

**V Answer the following questions:**

1. Why did Eric the Red name the island 'Greenland'?
2. Why is the area near the Greenland dangerous for ships?
3. How has the life of the Inuits changed since the past?
4. The Inuits make best use of the animals found in Greenland, give two examples.
5. Write a short note on the clothing style of Inuits.